



CITY PARENTS' SCHOOL

PLE PREP TEST 5 TERM III 2020/2021

PRIMARY SEVEN

SOCIAL STUDIES AND RELIGIOUS EDUCATION

Time allowed: 2 hours 15 minutes

Index No.

EMIS NO.					Personal No.				

Candidate's Name: _____

Candidate's Signature: _____

District Name: _____

School Name: _____

Read the following instructions carefully:

1. The paper has **two** sections: **A** and **B**
2. Section **A** has 40 questions (40 marks)
3. Section **B** has 15 questions (60 marks)
Answer **ALL** questions. All answers to both Sections A and B must be written in the spaces provided.
4. All answers must be written using a blue or black ball point pen or ink. Diagrams should be drawn in pencil.
5. Unnecessary crossing of work may lead to loss of marks.
6. Any handwriting that cannot be easily read may lead to loss of marks.
7. Do **not** fill anything in the boxes indicated;
For Examiner's use only.

FOR EXAMINER'S USE ONLY

QTN NO.	MARK	SIGN
1 – 10		
11 – 20		
21 – 30		
31 – 40		
41 – 43		
44 – 46		
47 – 49		
50 – 52		
53 – 55		
TOTAL		

Turn over

SECTION A: 40 MARKS

1. Name any one point where pedestrians cross a busy road safely.

2. Which group of foreigners introduced Zebu cattle in East Africa?


3. How does a sign post help people to find the location of a school?

4. State the effect of North East Trade winds on climate in East-Africa.

5. Give any one way people benefit the factory which is located in their District.

6. State the method used by the British to put Bunyoro under their rule.

Use the diagram below to answer number 7.



7. Give any one problem faced by people who build this type of house.

8. What was the major item of trade taken from Africa to America during Triangular Trade?

9. State any one effect of the Bantu migration into East Africa.

10. How does rural electrification program promote employment for people in Villages?

11. Name the cultural practice which helps boys to become men among the Bagisu.

12. How is a hygrometer useful at a weather station?

13. Give one reason why government discourages land fragmentation in Uganda.

14. Name the place in West Africa where Mungo park drowned?

15. Give any one cause of conflicts between the school and community members.

16. State any one danger caused by floods.

17. Give one reason why the rainfall distribution is not the same in different parts of Uganda.

18. Give any one advantage of multi-party system of governance in Uganda.

19. Why should a good map have a key?


20. Give any one problem caused by teenage pregnancy in Uganda.

21. Give one reason why farmers are advised to plant at the start of a rainy season.

22. Name the political party which led Uganda to independence.

23. Why was Universal Primary Education (UPE) introduced in Uganda?

24. Draw a map symbol for a dam in the space below.



25. How did the collapse of East African Community (EAC) affect the countries of East Africa?

26. Mention any one responsibility of a child at home.

27. Name the body in Uganda which promotes good water supply to the people.

28. State any one characteristic of Tropical climate.

29. Write any one political effect of colonial rule in Uganda.

30. Give one way people benefit from the creation of many districts in Uganda.

31. Give any one reason why the government of Uganda encourages children to abstain from sex until marriage.

32. State any one role of Chief Administrative Officer (CAO) in our District.

33. Name the bi-product of petroleum used in road construction.

34. Why is it important for children and youths to respect elders in society?

35. Give one reason why Pan-Africanists formed conferences in their struggle for freedom.

For questions 36 - 40, answer Either Christianity or Islam but not both alternatives in a number.

36. **Either:** Who was the father of Jacob and Esau?

Or: Who was the father of Prophet Yakuub?

37. **Either:** Give one reason why a Christian should pray before writing exams.

Or: Give one reason why a Moslem child should pray before writing exams.

38. **Either:** Which day marks the beginning of lent in Christianity?

Or: Name the Holy month of fasting in Islam.

39. *Either:* What lesson does a Christian learn from the story of Joseph and his brothers in Egypt?

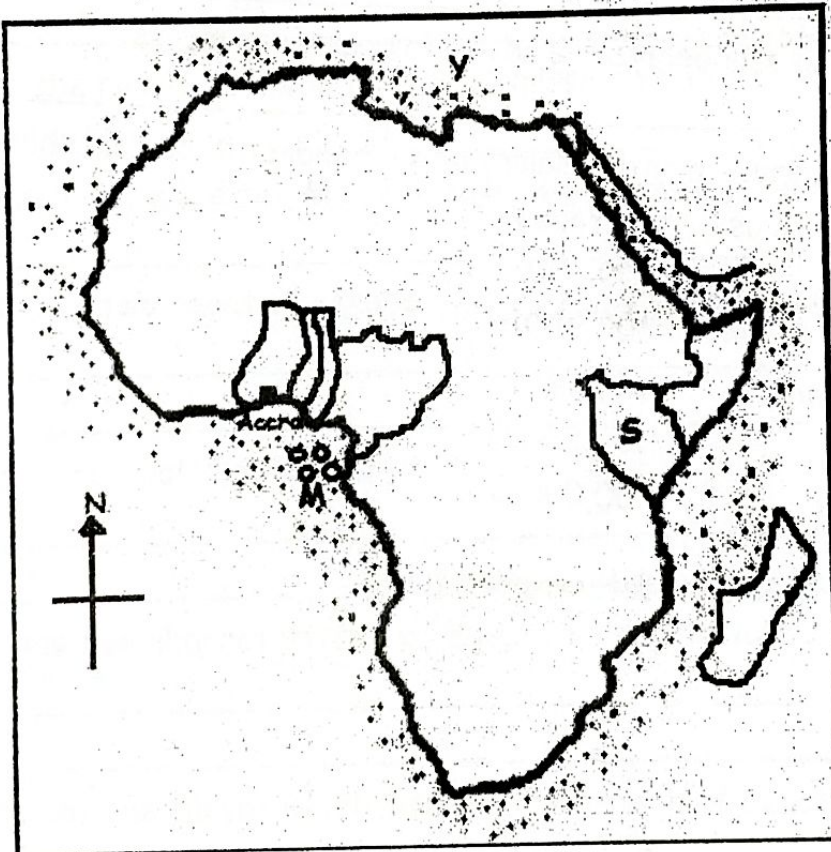
Or: What lesson does a Moslem learn from the story of Prophet Yusuf and his brothers in Egypt.

40. *Either:* State any one cause of success to a Christian.

Or: State any one cause of success to a Moslem.

SECTION B (60marks)

41. Study the map of Africa and answer questions about it.



a) Name the Island country marked **M** on the map.

b) What is the capital city of country **S**?

c) Draw longitude marked 0° on the map.

d) Name the feature marked Y.

42a) Mention any **two** members of a nuclear family apart from father and mother.

(i) _____

(ii) _____

b) State any **two** advantages of having a nuclear family.

(i) _____

(ii) _____

43a) State any **two** ways World Health Organization (WHO) helps in the fight against COVID-19.

(i) _____

(ii) _____

b) Mention any **one** challenge faced by World Health Organization in its work.

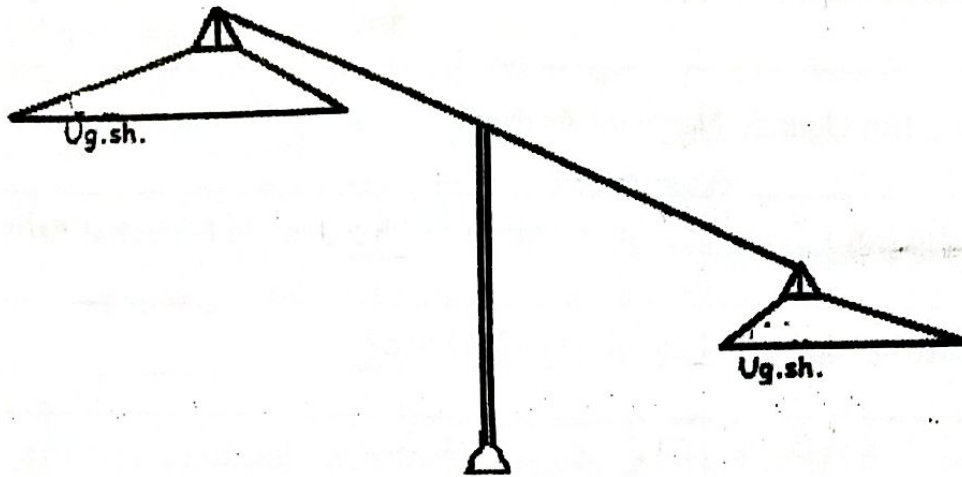
c) Give **one** reason why people are advised to use face masks.

44. Mr. Buyondo earns a monthly salary of six hundred thousand shillings (Ush. 600,000) and he uses it as follows:

Food	-	150,000/=
Rent	-	100,000/=
Transport	-	60,000/=
Fees	-	150,000/=
Others	-	50,000/=

a) What is Mr. Buyondo's total expenditure?

b) Represent the above information in the diagram below.



c) What type of budget does Mr. Buyondo have?

d) How does Mr. Buyondo benefit by making a budget?

45a) Name the missionary who built first mission station at Rabai Mpya near Mombasa.

b) In which way were the Mission stations important in the spread of Christianity?

c) State any **two** negative results of missionary work in East Africa.

(i) _____

(ii) _____

46a) What is natural vegetation?

b) Give any **two** characteristics of Equatorial vegetation.

(i) _____

(ii) _____

c) State any **one** factor which favours the growth of Equatorial forests.

47a) Fill in the missing lines of the Uganda National Anthem.

Oh Uganda! May God uphold thee,

(i) _____

United free; for liberty

(ii) _____

b) Who composed the Uganda National Anthem?

c) Give any **one** message from the first stanza of the Uganda National Anthem.

48a) Which organization unites all countries of Africa?

b) Give **one** reason why it is important for African countries to co-operate.

c) Write any **two** factors limiting co-operation among African countries.

(i) _____

(ii) _____

49a) State any **two** ways people benefit from a market in their area.

(i) _____

(ii) _____

b) Mention any **two** problems faced by the people who work in the market.

(i) _____

(ii) _____

50a) Which government policy was introduced to reduce illiteracy in Uganda?

b) State any **one** cause of illiteracy in African countries.

c) How does illiteracy affect the following in Uganda.

(i) the use of modern farming methods:

(ii) the use of modern communication means.

For questions 51 - 55, answer Either Christianity or Islam but not both alternatives in a number.

51. Either: (a) Which material did God use to create Adam?

b) Give **one** way Adam and Eve disobeyed God.

c) State any **two** effects of Adam and Eve's disobedience to people today.

(i) _____

(ii) _____

OR (a) Which material did Allah use to create Adam?

(b) Give **one** way Adam and Hawa disobeyed God.

(c) State any **two** effects of Adam and Hawa's disobedience to people today.

(i) _____

(ii) _____

52. Either: **Match List A to B correctly.**

List A

- (i) Golgotha
- (ii) Bethlehem
- (iii) Jerusalem
- (iv) Nazareth

List B

- Jesus grew up
- Jesus was crucified
- Jesus entered the city in great glory.
- Jesus was born.

- (i) Golgotha _____
- (ii) Bethlehem _____
- (iii) Jerusalem _____
- (iv) Nazareth _____

OR: **Match List A to B correctly.**

List A

- (i) Mina - Prophet Muhammad received the first revelation of the Quran.
- (ii) Mt Arafat - Prophet Muhammad delivered His farewell sermon.
- (iii) Cave of Hira - Prophet Muhammad spent three days and three nights when He was migrating from Mecca.

(iv) Cave of Thaur - Prophet Ibrahim stoned the devil (shaitan) who came between him and the command of Allah.

(i) Mina _____

(ii) Mt Arafat _____

(iii) Cave of Hira _____

(iv) Cave of Thaur _____

53. **Either:** (a) Mention any **two** fruit of the Holy Spirit according to Christianity.

(i) _____

(ii) _____

(b) Give any **two** ways the Holy Spirit helps Christians in their lives.

(i) _____

(ii) _____

OR: (a) Mention any **two** pillars of Iman in Islam.

(i) _____

(ii) _____

(b) Give any **two** ways pillars help a Moslem in life.

(i) _____

(ii) _____

54. **Either:** (a) State **one** way in which the following people showed their faith in God.

(i) Abraham _____

(ii) Job _____

(b) Give any **two** situations when a Christian can show faith like Job in life.

(i) _____

(ii) _____

OR: a) State **one** way how the following people showed faith in Allah.

(i) Prophet Ibrahim _____

(ii) Prophet Ayub _____

(b) Give any **two** situations when a Muslim can show faith like Prophet Ayub in life.

(i) _____

(ii) _____

55. **Either:** (a) State any **two** causes of sin among Christians.

(i) _____

(ii) _____

(b) Give any **two** ways a Christian can overcome sin.

(i) _____

(ii) _____

OR: (a) State any **two** causes of sin among Moslems.

(i) _____

(ii) _____

(b) Give any **two** ways a Moslem can overcome sin.

(i) _____

(ii) _____

THE END